



UNIVERSITY OF CAMBRIDGE INTERNATIONAL EXAMINATIONS  
International General Certificate of Secondary Education

CANDIDATE  
NAME

CENTRE  
NUMBER

--	--	--	--	--

CANDIDATE  
NUMBER

--	--	--	--

**CAMBRIDGE INTERNATIONAL MATHEMATICS**

**0607/11**

Paper 1 (Core)

**May/June 2012**

**45 minutes**

Candidates answer on the Question Paper

Additional Materials: Geometrical Instruments

**READ THESE INSTRUCTIONS FIRST**

Write your Centre number, candidate number and name on all the work you hand in.

Write in dark blue or black pen.

Do not use staples, paper clips, highlighters, glue or correction fluid.

You may use a pencil for any diagrams or graphs.

**DO NOT WRITE IN ANY BARCODES.**

Answer **all** the questions.

**CALCULATORS MUST NOT BE USED IN THIS PAPER.**

All answers should be given in their simplest form.

You must show all the relevant working to gain full marks and you will be given marks for correct methods even if your answer is incorrect.

The number of marks is given in brackets [ ] at the end of each question or part question.

The total number of marks for this paper is 40.

**For Examiner's Use**


This document consists of **9** printed pages and **3** blank pages.



**Formula List**

Area,  $A$ , of triangle, base  $b$ , height  $h$ .

$$A = \frac{1}{2}bh$$

Area,  $A$ , of circle, radius  $r$ .

$$A = \pi r^2$$

Circumference,  $C$ , of circle, radius  $r$ .

$$C = 2\pi r$$

Curved surface area,  $A$ , of cylinder of radius  $r$ , height  $h$ .

$$A = 2\pi r h$$

Curved surface area,  $A$ , of cone of radius  $r$ , sloping edge  $l$ .

$$A = \pi r l$$

Curved surface area,  $A$ , of sphere of radius  $r$ .

$$A = 4\pi r^2$$

Volume,  $V$ , of prism, cross-sectional area  $A$ , length  $l$ .

$$V = Al$$

Volume,  $V$ , of pyramid, base area  $A$ , height  $h$ .

$$V = \frac{1}{3}Ah$$

Volume,  $V$ , of cylinder of radius  $r$ , height  $h$ .

$$V = \pi r^2 h$$

Volume,  $V$ , of cone of radius  $r$ , height  $h$ .

$$V = \frac{1}{3}\pi r^2 h$$

Volume,  $V$ , of sphere of radius  $r$ .

$$V = \frac{4}{3}\pi r^3$$

Answer **all** the questions.

For  
Examiner's  
Use

- 1 (a) Work out  $(4 - 7)^2$ .

Answer (a) ..... [1]

- (b) Write down the value of  $\sqrt{144}$ .

Answer (b) ..... [1]

- 
- 2 (a) Write 0.00724538 correct to 3 significant figures.

Answer (a) ..... [1]

- (b) Write your answer to **part (a)** in standard form.

Answer (b) ..... [1]

- 
- 3 (a) Write down the first three multiples of 6.

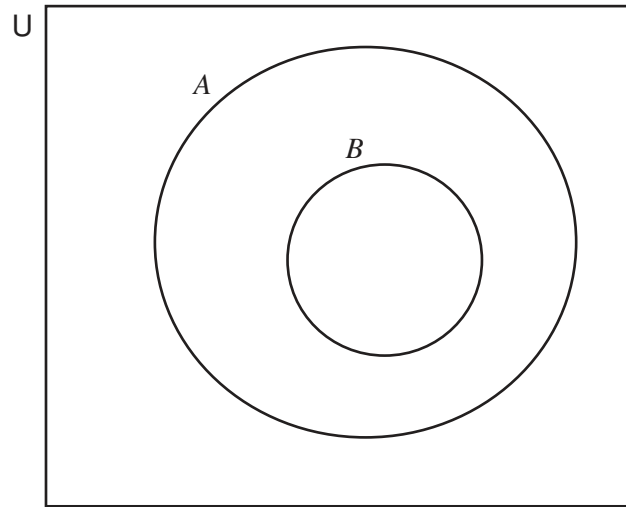
Answer (a) ..... , ..... , ..... [1]

- (b) Find the lowest common multiple of 6 and 15.

Answer (b) ..... [2]

---

- 4 In the Venn diagram shade the region  $A \cap B'$ .



[1]

- 5 Peter buys one ticket in the school raffle.  
The school sells 1000 tickets.  
The winning ticket is drawn at random.

What is the probability that Peter does **not** have the winning ticket?

*Answer* .....

[2]

6 (a) Simplify.

$$7(x - 2) - 3(3 + x)$$

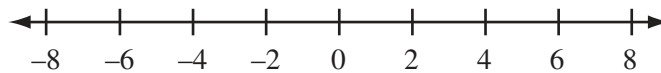
Answer (a) ..... [2]

(b) Solve the inequality.

$$7(x - 2) - 3(3 + x) < 1$$

Answer (b) ..... [2]

(c) Show your answer to **part (b)** on the number line below.



[2]

7 (a) Write as a single fraction.

$$\frac{3x}{4} + \frac{x}{3}$$

Answer (a) ..... [2]

(b) Simplify.

$$\frac{18x^7}{6x^5}$$

Answer (b) ..... [2]

---

8 The first five terms of a sequence are 2, 5, 10, 17, 26.

(a) Write down the next term in this sequence.

Answer (a) ..... [1]

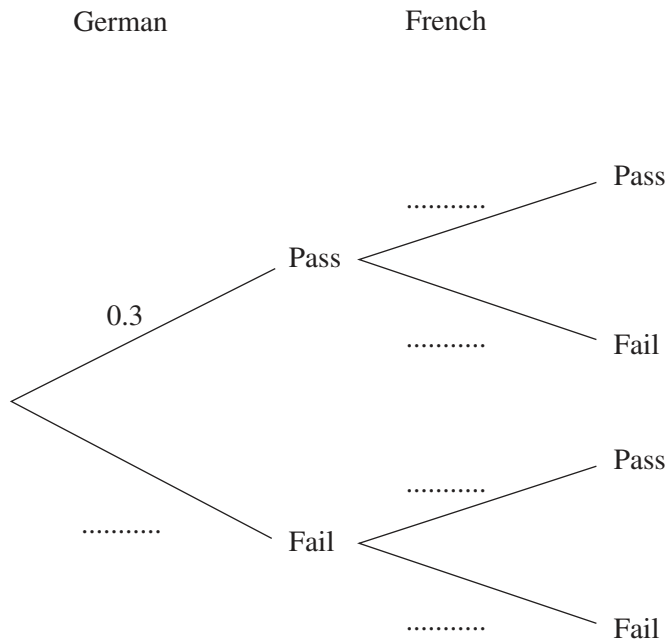
(b) Find the  $n$ th term of this sequence.

Answer (b) ..... [3]

---

- 9 Alice takes examinations in German and French.  
The probability that she passes German is 0.3 .  
The probability that she passes French is 0.6 .

(a) Complete the tree diagram.



[2]

(b) Work out the probability that Alice passes German and fails French.

Answer (b) .....

[2]

- 10 Lucy counts the number of words in each sentence of a film review.  
The number of words in each sentence is shown below.

7      8      12      7      9      11      4      12      8      12

Find

- (a) the mode,

Answer (a) ..... [1]

- (b) the mean,

Answer (b) ..... [2]

- (c) the range.

Answer (c) ..... [1]

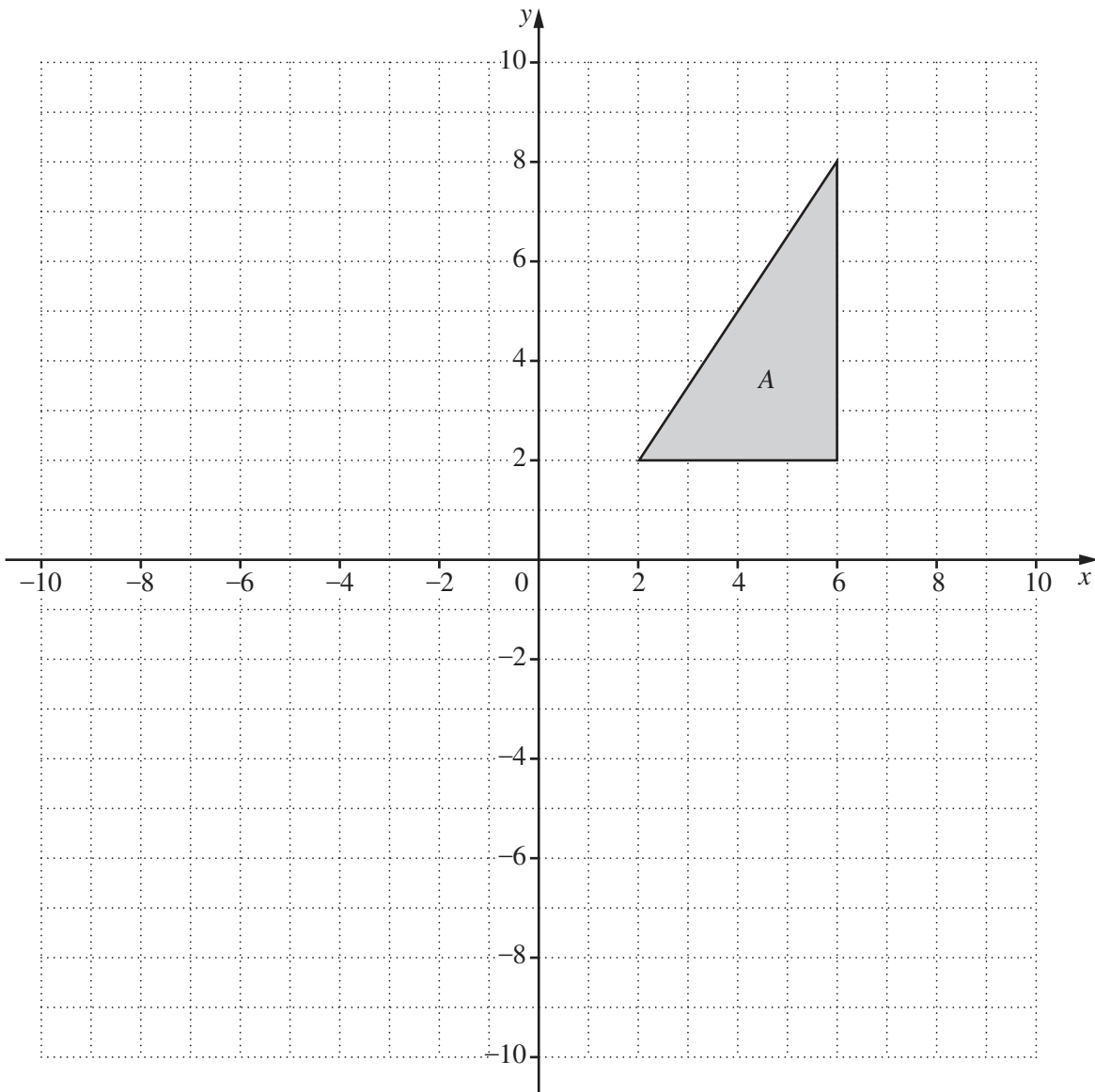
- 
- 11 One lap of the Melbourne Grand Prix circuit is 5200 metres.  
A racing driver completes a lap in 1.3 minutes.

Calculate his average speed in **kilometres per hour**.

Answer ..... km/h [3]

---





- (a) Reflect triangle  $A$  in the  $x$ -axis.  
Label it  $B$ . [1]
- (b) Translate triangle  $A$  by the vector  $\begin{pmatrix} -6 \\ -10 \end{pmatrix}$ .  
Label it  $C$ . [2]
- (c) Rotate triangle  $A$   $90^\circ$  anti-clockwise about centre  $(2, 2)$ .  
Label it  $D$ . [2]





---

Permission to reproduce items where third-party owned material protected by copyright is included has been sought and cleared where possible. Every reasonable effort has been made by the publisher (UCLES) to trace copyright holders, but if any items requiring clearance have unwittingly been included, the publisher will be pleased to make amends at the earliest possible opportunity.

University of Cambridge International Examinations is part of the Cambridge Assessment Group. Cambridge Assessment is the brand name of University of Cambridge Local Examinations Syndicate (UCLES), which is itself a department of the University of Cambridge.